



Name: _____

Subject: Number Work


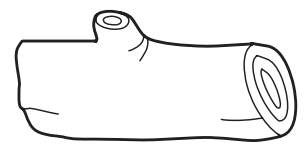





Grade: Primer B

PRACTICE WORKSHEET

Date: _____

Concept: Colours

Identify the outlines of the pictures and colour them appropriately.



Tick (✓) the appropriate box

Teacher's Sign: _____

Name: _____

Subject: Number Work

Grade: Primer B

PRACTICE WORKSHEET

Date: _____

Concept: Shapes and Colours


Read the names of the shapes and colours. Draw the shapes and colour them accordingly.




Square - Red



Triangle - Brown



Circle - Yellow



Semicircle - Blue



Rectangle - Green



Oval - Pink



Diamond - Purple



Tick (✓) the appropriate box

Teacher's Sign: _____

Name: _____

Subject: Number Work

Grade: Primer B




PRACTICE WORKSHEET


Date: _____

Concept: Secondary Colours


Look at the outline images and colour them as directed.



The brinjal is purple.



The leaf is green.



The fish is orange.



Tick (✓) the appropriate box

Teacher's Sign: _____

Name: _____

Subject: Number Work

Grade: Primer B

PRACTICE WORKSHEET

Date: _____

Concept: Bigger Numbers (1-50)

Read the numbers in the circles. Tick (✓) the number that is bigger than the given number in each set.

36

32 4 39

7

5 12 2

22

40 21 19

45

38 36 50

3

1 2 6

11

33 2 10

10

35 3 8

41

38 48 35

8

7 25 3

26

25 7 38

18

26 17 6

31

33 20 22



Tick (✓) the appropriate box

Teacher's Sign: _____



Name: _____

Subject: Number Work

Grade: Primer B

PRACTICE WORKSHEET

Date: _____

Concept: Bigger Numbers (1-50)

Read each number. Write a number that is bigger than the given number in each set.

32

○

41

○

23

○

7

○

18

○

23

○

5

○

35

○

27

○

13

○

46

○

11

○



Tick (✓) the appropriate box

Teacher's Sign: _____

Name: _____

Subject: Number Work

Grade: Primer B



PRACTICE WORKSHEET

Date: _____

Concept: Smaller Numbers (1-50)

Read each number. Write a number that is smaller than the given number in each set.

33

26

8

30

16

47

43

10

25

21

12

40

20

50



Tick (✓) the appropriate box

Teacher's Sign: _____

Name: _____



Subject: Number Work

Grade: Primer B

PRACTICE WORKSHEET

Date: _____

Concept: Smaller Numbers (1-50)

Read the number in each circle. Tick (✓) the number that is smaller than the given number in each set.

23

30 18 43

42

26 50 43

40

10 43 50

38

40 11 48

16

32 5 26

21

36 28 12

8

1 42 18

30

41 33 28

34

45 36 21

12

7 21 33

26

30 50 15

5

7 4 12



Tick (✓) the appropriate box

Teacher's Sign: _____

Name:

Subject: Number Work

Grade: Primer B

PRACTICE WORKSHEETDate:

Concept: Number that comes after the given number.

Write the number that comes after the given number in each set.

23	<input type="text"/>
----	----------------------

7	<input type="text"/>
---	----------------------

15	<input type="text"/>
----	----------------------

49	<input type="text"/>
----	----------------------

38	<input type="text"/>
----	----------------------

1	<input type="text"/>
---	----------------------

36	<input type="text"/>
----	----------------------

26	<input type="text"/>
----	----------------------

44	<input type="text"/>
----	----------------------

10	<input type="text"/>
----	----------------------

29	<input type="text"/>
----	----------------------

5	<input type="text"/>
---	----------------------

22	<input type="text"/>
----	----------------------

32	<input type="text"/>
----	----------------------

16	<input type="text"/>
----	----------------------



Tick (✓) the appropriate box

Teacher's Sign: _____

Name: _____

Subject: Number Work

Grade: Primer B

PRACTICE WORKSHEET

Date: _____

Concept: Number that comes after the given number.

Read the number in each box. Circle the number that comes after the given number in each set.

9

35 10 8

40

50 37 41

35

13 45 36

19

18 20 36

20

50 21 10

45

46 44 38

26

27 29 35

3

5 8 4

18

9 19 12

14

17 13 15

31

32 33 34

28

29 21 35



Tick (✓) the appropriate box

Teacher's Sign: _____



Name: _____

Subject: Number Work

Grade: Primer B

PRACTICE WORKSHEET

Date: _____

Concept: Number that comes before the given number.

Write the number that comes before the given number in each set.

<input type="text"/>	8
----------------------	---

<input type="text"/>	26
----------------------	----

<input type="text"/>	3
----------------------	---

<input type="text"/>	34
----------------------	----

<input type="text"/>	43
----------------------	----

<input type="text"/>	50
----------------------	----

<input type="text"/>	10
----------------------	----

<input type="text"/>	17
----------------------	----

<input type="text"/>	32
----------------------	----

<input type="text"/>	25
----------------------	----

<input type="text"/>	11
----------------------	----

<input type="text"/>	41
----------------------	----



Tick (✓) the appropriate box

Teacher's Sign: _____

Name: _____

Subject: Number Work

Grade: Primer B



PRACTICE WORKSHEET

Date: _____

Concept: Number that comes before the given number.

Identify the number that comes before the given number and colour the box that has the number.



37	38	36	47
----	----	----	----

2	1	3	7
---	---	---	---

50	38	49	40
----	----	----	----

6	8	3	5
---	---	---	---

48	49	38	47
----	----	----	----

10	9	11	7
----	---	----	---

13	11	14	12
----	----	----	----

25	52	24	23
----	----	----	----

21	25	20	22
----	----	----	----

42	41	38	27
----	----	----	----

18	17	11	19
----	----	----	----

34	40	37	33
----	----	----	----



Tick (✓) the appropriate box

Teacher's Sign: _____

Name: _____

Subject: Number Work

Grade: Primer B



PRACTICE WORKSHEET

Date: _____

Concept: Number that comes between the given numbers. (1-50)

Write the number that comes between the given numbers in each set.

29		31
----	--	----

43		45
----	--	----

1		3
---	--	---

39		41
----	--	----

26		28
----	--	----

12		14
----	--	----

19		21
----	--	----

24		26
----	--	----

35		37
----	--	----

40		42
----	--	----



Tick (✓) the appropriate box

Teacher's Sign: _____



Name: _____

Subject: Number Work

Grade: Primer B

PRACTICE WORKSHEET

Date: _____

Concept: Number that comes between the given numbers. (1-50)

Read the numbers. Identify the number that comes between the given numbers in each set and join them by drawing lines. One has been done for you.

	4	
5	8	7
	6	

	35	
32	36	34
	33	

	18	
13	16	15
	14	

	43	
40	41	42
	44	

	22	
21	25	23
	20	

	18	
17	20	19
	16	



Tick (✓) the appropriate box

Teacher's Sign: _____

Name: _____

Subject: Number Work

Grade: Primer B

PRACTICE WORKSHEET

Date: _____

Concept: Missing Numbers

Write the missing numbers in each series.

3	_____	5	_____	_____	8
---	-------	---	-------	-------	---

12	_____	_____	15	_____	_____
----	-------	-------	----	-------	-------

21	_____	23	_____	_____	26
----	-------	----	-------	-------	----

34	_____	_____	_____	38	_____
----	-------	-------	-------	----	-------

45	_____	_____	_____	_____	50
----	-------	-------	-------	-------	----



Tick (✓) the appropriate box

Teacher's Sign: _____



Name: _____

Subject: Number Work

Grade: Primer B

PRACTICE WORKSHEET

Date: _____

Concept: Tens and Ones

Read the numbers. Identify the numbers in tens and ones places and write them accordingly in the given space. One has been done for you.

	Tens	Ones
22	2	2
46		
38		
21		
25		
40		
49		
35		



Tick (✓) the appropriate box

Teacher's Sign: _____